




Malaysia ASEAN Schools Math Olympiads

e-LEARNING

F 100903 H

Hints

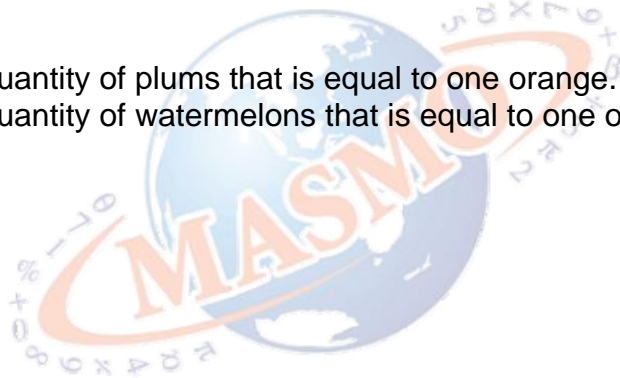
- 1 Count separately from 501 to 599, 601 to 699 and 701 to 751. Make sure you do not miss all the 7's in the 70's.





Hints

- 2** Find out the quantity of plums that is equal to one orange.
Find out the quantity of watermelons that is equal to one orange.





Hints

- 3 Separate the whole diagram into various smaller rectangles and count their area accordingly.



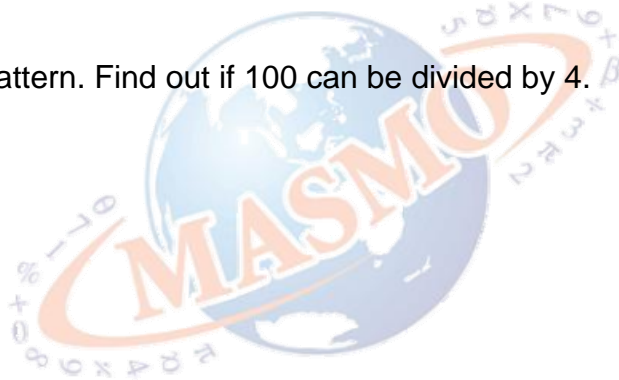


e-LEARNING

F 100903 H

Hints

- 4 Try to find a pattern. Find out if 100 can be divided by 4.





Hints

- 5 Record the total amount spent and total amount received by David.

