



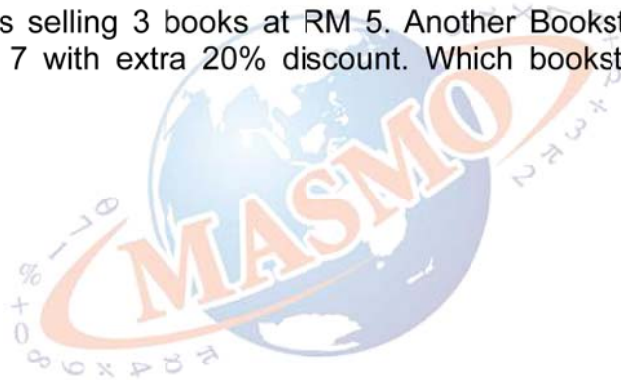
- 1 What is the value of the following?

$$\frac{1}{4} - \frac{0.1}{4} + \frac{1}{0.4} - \frac{0.1}{0.4}$$



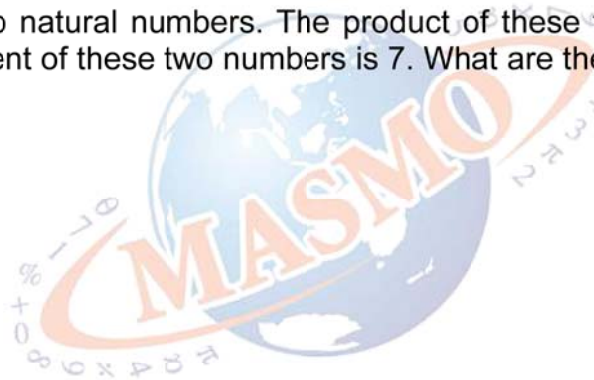


- 2** Bookstore A is selling 3 books at RM 5. Another Bookstore B is selling 4 books at RM 7 with extra 20% discount. Which bookstore sells cheaper books?



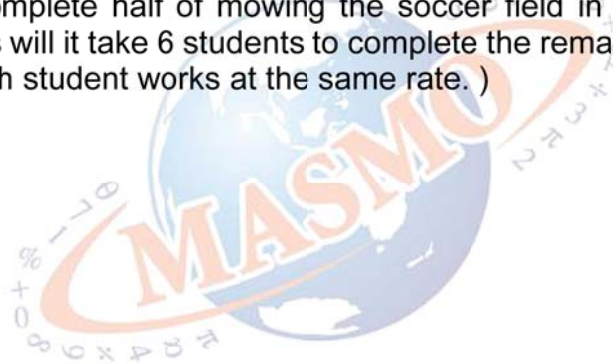


- 3** There are two natural numbers. The product of these two numbers is 252 and the quotient of these two numbers is 7. What are these two numbers?





- 4** 4 students complete half of mowing the soccer field in 100 minutes. How many minutes will it take 6 students to complete the remaining half of the job? ( Assume each student works at the same rate. )





- 5 The rectangle below is divided up into four smaller rectangles. The length of each segment is a whole number of cm. The areas of three of the rectangles are given in the diagram. Find the number of sq cm in the total area of rectangle ABCD.

